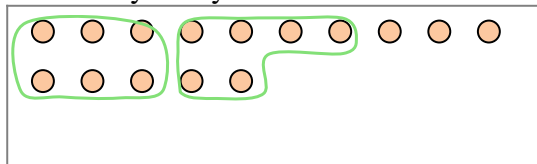





Use the shapes provided to answer the questions.


- Ex) There are 15 shapes below. How many groups of 6 can you make with them?  
How many will you have left over?




- 1) There are 18 shapes below. How many groups of 3 can you make with them?  
How many will you have left over?



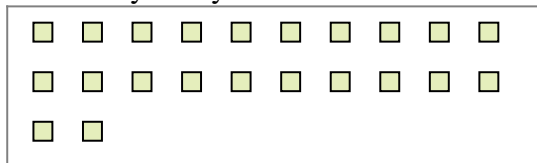
- 2) There are 27 shapes below. How many groups of 2 can you make with them?  
How many will you have left over?



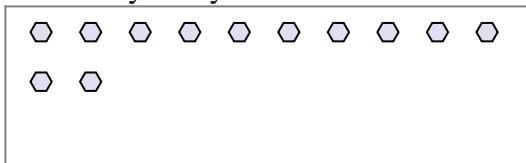
- 3) There are 28 shapes below. How many groups of 6 can you make with them?  
How many will you have left over?




- 4) There are 22 shapes below. How many groups of 7 can you make with them?  
How many will you have left over?



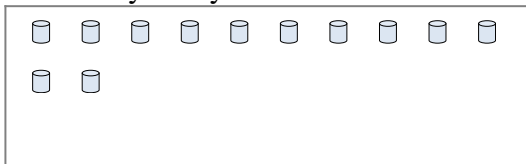
- 5) There are 12 shapes below. How many groups of 7 can you make with them?  
How many will you have left over?




- 6) There are 18 shapes below. How many groups of 3 can you make with them?  
How many will you have left over?



- 7) There are 12 shapes below. How many groups of 8 can you make with them?  
How many will you have left over?



- 8) There are 13 shapes below. How many groups of 9 can you make with them?  
How many will you have left over?



- 9) There are 22 shapes below. How many groups of 3 can you make with them?  
How many will you have left over?

**Answers**Ex. 2Ex. 3

1a. \_\_\_\_\_

1b. \_\_\_\_\_

2a. \_\_\_\_\_

2b. \_\_\_\_\_

3a. \_\_\_\_\_

3b. \_\_\_\_\_

4a. \_\_\_\_\_

4b. \_\_\_\_\_

5a. \_\_\_\_\_

5b. \_\_\_\_\_

6a. \_\_\_\_\_

6b. \_\_\_\_\_

7a. \_\_\_\_\_

7b. \_\_\_\_\_

8a. \_\_\_\_\_

8b. \_\_\_\_\_

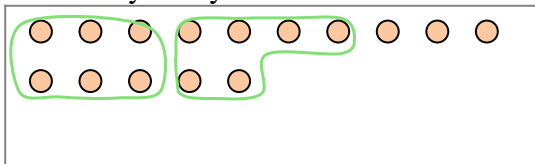
9a. \_\_\_\_\_

9b. \_\_\_\_\_




Use the shapes provided to answer the questions.


- Ex) There are 15 shapes below. How many groups of 6 can you make with them?  
How many will you have left over?




- 1) There are 18 shapes below. How many groups of 3 can you make with them?  
How many will you have left over?



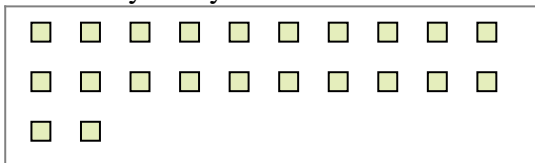
- 2) There are 27 shapes below. How many groups of 2 can you make with them?  
How many will you have left over?



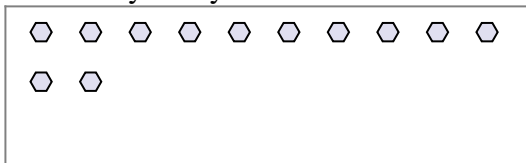
- 3) There are 28 shapes below. How many groups of 6 can you make with them?  
How many will you have left over?



- 4) There are 22 shapes below. How many groups of 7 can you make with them?  
How many will you have left over?



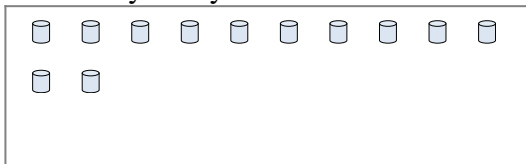
- 5) There are 12 shapes below. How many groups of 7 can you make with them?  
How many will you have left over?




- 6) There are 18 shapes below. How many groups of 3 can you make with them?  
How many will you have left over?



- 7) There are 12 shapes below. How many groups of 8 can you make with them?  
How many will you have left over?



- 8) There are 13 shapes below. How many groups of 9 can you make with them?  
How many will you have left over?



- 9) There are 22 shapes below. How many groups of 3 can you make with them?  
How many will you have left over?

**Answers**Ex. 2Ex. 31a. 61b. 02a. 132b. 13a. 43b. 44a. 34b. 15a. 15b. 56a. 66b. 07a. 17b. 48a. 18b. 49a. 79b. 1